

Level E - Form 1 - Reading: Interpret Graphic Information

Sample Question

Look at the sign and answer the question.

This sign means



- A ships
- B danger
- C hospital
- D drugstore

Level E - Form 1 - Reading: Interpret Graphic Information

Read each item. Then do Numbers 1 through 3.

1. What does this sign mean?



- A telephone
- B order by phone
- C phone not working
- D listed in the yellow pages

2. What does this sign mean?



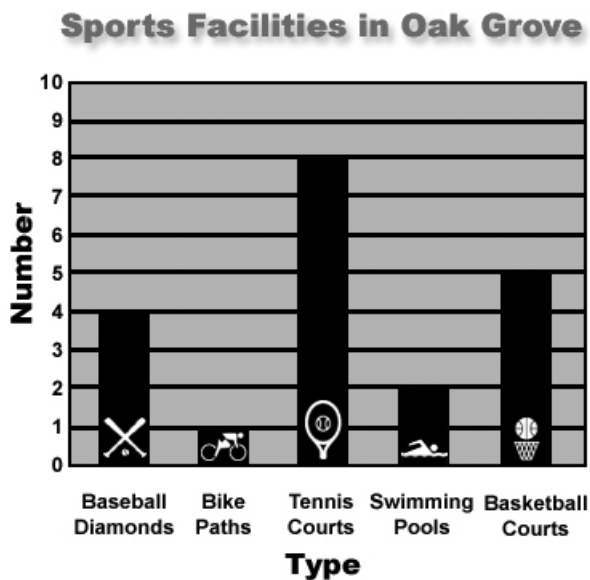
- F restaurant
- G no running
- H train crossing
- J do not enter

3. What does this sign mean?



- A public pool
- B no swimming
- C the lake is dry
- D don't waste water

This graph shows information about the sports facilities in Oak Grove. Study the graph. Then do Numbers 4 through 6.



4. What does the graph show about sports facilities in Oak Grove?
- F where they are
 - G how many there are
 - H who uses them most
 - J when they are open
5. Which type of sports facility is most common in Oak Grove?
- A bike paths
 - B tennis courts
 - C basketball courts
 - D baseball diamonds
6. The graph shows that Oak Grove has four
- F bike paths
 - G swimming pools
 - H basketball courts
 - J baseball diamonds

Study the credit card receipt that Robert got at the bookstore. Then do Numbers 7 through 10.

Date: Dec. 2, 2003
Authorization: R29530
0100 2212 3323 4434
5542083123456
Reference No. :
Dept. :
Check No. :
Server:
Clerk: SB

1 Book	5.75
1 Card	1.75
1 Pen	1.35
Subtotal	8.85
Tax	.92
Tip/Misc	
TOTAL	9.77

Robert L. Perkins

PURCHASER SIGN HERE

CUSTOMER COPY
IMPORTANT: RETAIN THIS
COPY FOR YOUR RECORDS

7. Before tax was added, how much did the pen cost?
- A \$0.92
 - B \$1.35
 - C \$5.75
 - D \$8.85
8. When did Robert go to the bookstore?
- F December 2, 2003
 - G September 2002
 - H March 1, 2000
 - J The receipt doesn't tell.
9. How much was Robert's total bill?
- A \$0.92
 - B \$8.85
 - C \$9.20
 - D \$9.77
10. What should Robert do with this receipt?
- F throw it away
 - G mail it to the credit card company
 - H give it back to the bookstore clerk
 - J save it to check when he receives his credit card bill

The word *date* appears on Robert's receipt. Here is part of a dictionary entry for the word *date*. Use it to do Number 11.

date (dāt) **verb** 1. to mark showing a specific time 2. to give the age of something **noun** 1. the time when an event occurs 2. one person who joins another to go out socially

11. Which definition of the word *date* would be used on a credit card receipt?
- A verb 1
 - B verb 2
 - C noun 1
 - D noun 2

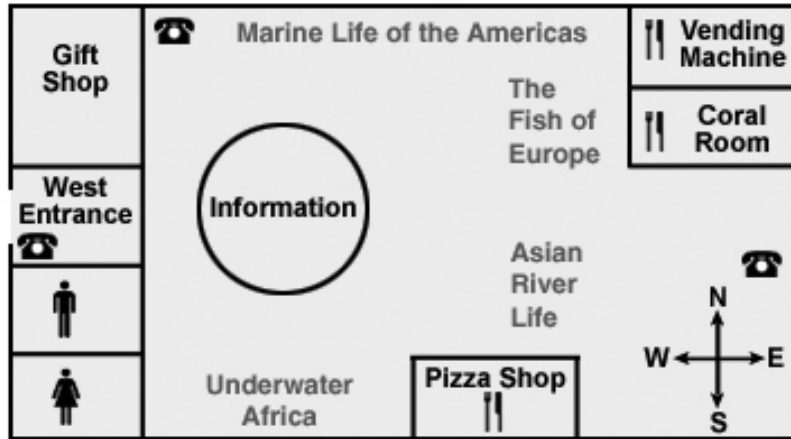
The word *sign* appears on Robert's receipt. Here is part of a dictionary entry for the word *sign*. Use it to do Number 12.

sign (sīn) **verb** 1. to write one's name 2. to give information by using sign language **noun** 1. a poster or other written or drawn item that gives information 2. a movement that gives information

12. Which definition of the word *sign* would be used on a credit card receipt?
- F verb 1
 - G verb 2
 - H noun 1
 - J noun 2

When Maria visited the aquarium, she picked up this map. Study the map and the key. Then do Numbers 13 through 15.

Redding Aquarium

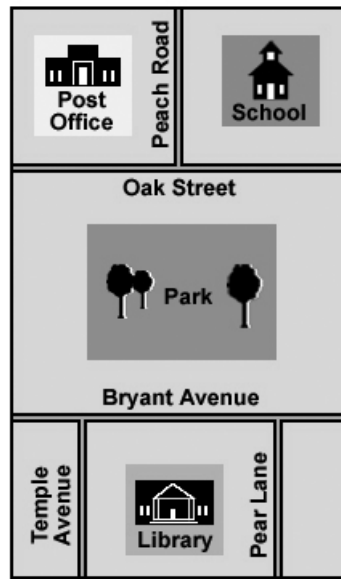


13. Maria is in the Coral Room. In which direction must she walk to get to the Gift Shop?
 A north
 B east
 C south
 D west

14. How many places are there to eat in the aquarium?
 F one
 G two
 H three
 J four

15. If Maria is in the Coral Room, where is the nearest phone?
 A outside the gift shop
 B next to the Information Desk
 C near the Asian River Life exhibit
 D just inside the west entrance

This map shows a part of Julio's hometown. Study the map. Then do Numbers 16 through 17.



16. Which street connects with Oak Street?

- F Peach Road
- G Pear Lane
- H Bryant Avenue
- J Temple Avenue

17. The library is located between

- A Pear Lane and Oak Street
- B Bryant Avenue and Oak Street
- C Pear Lane and Temple Avenue
- D Peach Road and Bryant Avenue

Pablo's son is in school. Pablo must complete this form for the school. Study the form. Then do Numbers 18 through 20.

Emergency Contact Card for Student

Fill in this card. Return it to the school office before September 15. We must have an emergency card on file for each student. If you do not return this card by September 15, your student will not be allowed to attend classes.

1. Student's Name _____
2. Parent's Name _____
3. Parent's Address _____
4. Parent's Home Phone Number _____
5. Parent's Work Phone Number _____
6. Name of Emergency Contact Person Other than Parent _____
7. Phone Number of Person Named on Line 6 _____
8. Name of Student's Doctor _____
9. Doctor's Address _____
10. Doctor's Phone Number _____

18. Pablo must write the name of a person to contact if he cannot be reached. Where should Pablo write this name?

- F line 2
- G line 4
- H line 6
- J The form doesn't have a line for this information.

19. What will happen if Pablo does not return the emergency card before September 15?

- A Pablo's son will not be allowed to attend classes.
- B The school will call an emergency contact person.
- C Pablo will be sent to the principal's office.
- D The school will send home another card.

20. When would the school most likely use the information on this card?

- F if Pablo and his son moved into a different school district
- G if Pablo's son forgot to take his homework to class
- H if Pablo's son were badly hurt on the playground
- J if Pablo and his son wanted to go on a vacation